




3

Electricity: Circuits and their Components



Nihal and his classmates were excited for their school trip to the Bhakra Nangal Dam. There they would visit the hydroelectric power house where the force of falling water was used to generate electricity. They also looked forward to the free 13 kilometre-train ride from Nangal in Punjab to Bhakra in Himachal Pradesh, along the beautiful Sutlej river and through the Shivalik hills.

Prior to the trip, Nihal and his classmates were given a group assignment to prepare a presentation on the uses of electricity. They began by looking around their houses, then their school, followed by their neighbourhood, their city, and finally they searched the internet. To their astonishment, their list kept growing. They decided to organise the uses under different headings.



0777CH03

Cooking

Electric kettle, mixer grinder, toaster, oven, microwave, _____

Lighting

Homes, offices, streets, markets, factories, _____

Transportation

Train, bus, car, scooter, lift, escalator, _____

Heating and Cooling

Fan, room heater, immersion rod, geyser, refrigerator, air conditioner, _____

Entertainment

Television, radio, _____

Communication


Mobile phone, Internet, _____


Others

Water pump, crane, computer, _____

Can you help Nihal by adding some more uses to his lists? Also, suggest some other ways of grouping the uses of electricity.

We use electricity all the time, so let us learn something more about electricity. You have learnt earlier that electricity is generated in multiple ways—by windmills, by using wind energy, by solar panels capturing the Sun’s energy, by falling water and by using natural gas or coal (in the chapter ‘Nature’s Treasures’ in the Grade 6 Science textbook *Curiosity*). The electric supply from these sources reaches our homes and factories via wires. For example, at home we plug in various devices to the electrical sockets in the wall. However, to learn about electricity, we will focus on a portable source of electricity that most of us may have used. Let us start with its use in a common device like a torchlight.

 **Caution**—The danger signs on electric poles and other appliances warn people that electricity can be dangerous if not carefully handled. Never ever perform experiments with power supply at your home or school. Even electricity from portable generators can be dangerous. Use only batteries or cells, like those in torchlights, wall clocks, radios, or remotes, for experiments with electricity.



3.1 A Torchlight



You might have used a torchlight, also called a torch or a flashlight.

Activity 3.1: Let us explore

- ❖ Take a torchlight similar to the one shown in Fig. 3.1.
- ❖ **Observe** it carefully. Do you notice a lamp? And a switch?
- ❖ Slide its switch and observe. Does the torch lamp glow?
- ❖ Now slide the switch back to its original position and observe the torch lamp.



Fig. 3.1: A torchlight

You might have noticed that in one position of the switch, the torch lamp glows and in the other position the lamp does not glow.

- ❖ Now, open the torchlight. What do you find inside?

Inside the torchlight, you may find two or more electric cells.

Why does the torch lamp glow in one position of its switch?



3.2 A Simple Electrical Circuit

To understand how a torch works, let us first find out about its components.

3.2.1 Electric cell

Activity 3.2: Let us observe

- ❖ Take an electric cell, turn it around and look at it carefully (Fig. 3.2). Do you notice a positive (+) sign and a negative (-) sign marked on the electric cell? Do you also notice that it has a small protruding metal cap on one side and a flat metal disc on the other side?



Fig. 3.2: An electric cell

All electric cells have two terminals; one is called positive (+ve) while the other is negative (-ve). The metal cap is the **positive terminal** of the electric cell and the metal disc is the **negative terminal**. The electric cell is a portable source of electrical energy.

3.2.2 Battery

Activity 3.3: Let us experiment

- ❖ Take a torch which uses two cells. Open its cell compartment and take out the cells.
- ❖ Put the cells back in a different order. Also, try reversing the direction of one cell. Then, slide the switch and check whether the lamp glows in each case.
- ❖ Check the order in which the cells were placed in the torch when the lamp glows.

In a torch, we generally use more than one cell. Are those placed in any particular order?



The lamp glows when the cells are placed in the order as shown in Fig. 3.3. Notice how the terminals of the two cells are connected. The positive terminal of one cell is connected to the negative terminal of the next cell. Such a combination of two or more cells is called a **battery**.




Fig. 3.3: A battery made up of (a) two cells (b) four cells

For many devices, we may need more than one cell. So, we connect two or more cells together as shown in Fig. 3.3. Connecting more than one cell provides energy to the circuit for a longer time and/or more energy.



FASCINATING FACTS

The term battery is also used for a single cell. We use the term battery even for the single cell that powers our mobile phones.

3.2.3 Electric lamp

Incandescent Lamp

Activity 3.4: Let us observe

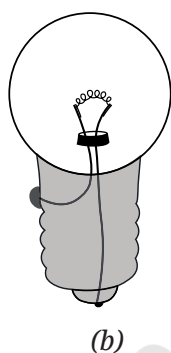
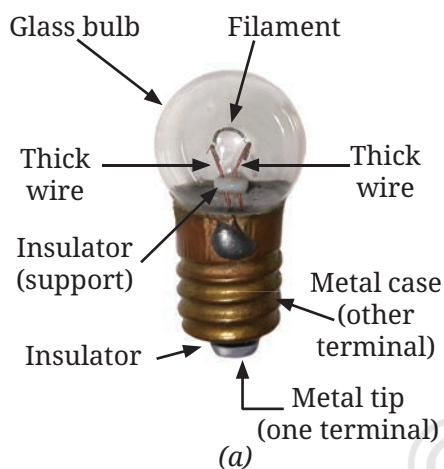


Fig. 3.4: (a) A small incandescent lamp used in a torch (b) its simplified drawing showing the connection of wires to the terminals

For this activity, you will require a torchlight with an incandescent lamp (or light bulb). Many old torchlights still use such lamps. With your teacher's help, confirm that your torchlight uses an incandescent lamp.

- ❖ Take the torch and **examine** its lamp. What do you see? Do you notice a thin wire fixed in the middle of the glass bulb?
- ❖ Now, switch on the torch. Which part of the lamp glows?

The thin wire inside the glass bulb of the lamp glows. The glowing thin wire is called the **filament** of the lamp.

- ❖ Take out the lamp with the help of your teacher and inspect it from all sides. How is the filament fixed?

The filament is attached to two thicker wires that support it, as shown in Fig. 3.4a. One thick wire connects to the metal case at the lamp's base, while the other connects to the metal tip at the centre of the base (Fig. 3.4b). These form the two terminals of the lamp, and are fixed in a way that they do not touch each other. In such **incandescent lamps**, the filament gets hot and glows to produce light.

However, my torch has a different kind of lamp. In fact, it cannot be taken out of the torch as it is fixed in it.



LED Lamp

Many torches in use today have a Light Emitting Diode (LED) lamp, instead of an incandescent lamp, as shown in Fig. 3.5.




Fig. 3.5: An LED lamp for torch

Activity 3.5: Let us observe

- ❖ Take an LED of any colour (Fig. 3.6) and observe. Do you see any filament inside it?
- ❖ **Notice** the length of two wires attached to the LED. Do you find one of those longer than the other?

Unlike incandescent lamps, LEDs do not have filaments (Fig. 3.6). They also have two terminals, but one is positive (attached to a longer wire) and the other is negative (the shorter wire). A torch may use one or more LEDs, sometimes of different shapes, in its lamp.

After having learnt about the electric cell, battery, and electric lamps, we are now ready to make the torch lamp glow using an electric cell or battery.

3.2.4 Making an electric lamp glow using an electric cell or battery

Activity 3.6: Let us construct

- ❖ Take an electric cell, an incandescent lamp used in a torch, a cell holder, a lamp holder, and four lengths of electric wire.
- ❖ Remove about 1 cm of the plastic covering from both ends of each wire to expose the metal.
- ❖ Attach two wires to the two ends of the cell holder as shown in Fig. 3.7a.



Fig. 3.6: LEDs of different colours




Fig. 3.7: (a) An electric cell holder with two wires attached (b) An electric cell inside the cell holder (c) Wires connected to an electric cell using electrical tape

- ❖ Insert the cell in the holder such that its negative terminal is towards the spring side of the holder (Fig. 3.7b). In case a cell holder is not available, fix the two wires to the cell using electrical tape (Fig. 3.7c).
- ❖ Attach two wires to the screws of the lamp holder as shown in Fig. 3.8a. Fix the lamp in the holder by turning it around in the holder (Fig. 3.8b). In case a lamp holder is not available, use electrical tape to attach two wires to the two ends of the lamp (Fig. 3.8c).



Fig. 3.8: (a) An electric lamp holder with wires attached (b) An incandescent lamp inside the lamp holder (c) Wires connected to incandescent torch lamp with electrical tape

Now, we are ready to connect the cell to the lamp to make it glow.

- ❖ We will conduct this activity in two parts — prediction and observation. Some of the ways in which the lamp and the cell can be connected are shown in Table 3.1.
 - **Predict**, for each arrangement, if the lamp will glow or not and write your prediction in Table 3.1.
 - Now, connect the lamp and the cell, and observe if the lamp glows or not. Note down your observation in Table 3.1. Also, for the lamps which glow, colour their glass bulbs yellow.

**Table 3.1: Trying to make the lamp glow**

Note: The lamps are not shown glowing in any circuit

S.No.	Arrangement of Cell and Lamp	Prediction	Observation
1.			
2.			
3.			
4.			
5.			
6.			

The lamp glows in the arrangements at S.No. 1 and 6 and does not glow in the remaining arrangements. Now, carefully look at the arrangements in which the lamp glows. **Compare** these with those in which the lamp does not glow. Can you find the reason for the difference?

3.2.5 An electrical circuit

The lamp glows when one terminal of the lamp is connected to one terminal of the electric cell and the other terminal of the lamp to the other terminal of the cell as shown in Fig. 3.9. This setup forms an **electrical circuit**, which provides a complete path for electric current to flow through the lamp. The lamp glows only when current passes through the circuit.



Fig. 3.9: An electrical circuit

The direction of electric current in an electrical circuit is taken to be from the positive to the negative terminal of the electric cell. When the terminals of the lamp are connected with those of the electric cell by wires, the current passes through the filament of the incandescent lamp and makes it glow. With an incandescent lamp, it does not matter which of its terminals connects to the positive or negative terminal of the cell. The lamp will glow as long as the circuit is complete and current flows through the filament.



FASCINATING FACTS

Sometimes, an incandescent lamp does not glow even when connected to a cell. We say the lamp has 'fused' usually due to a broken filament. A broken filament stops the flow of current, preventing the lamp from glowing.

Let us now try to make an LED glow.

Activity 3.7: Let us experiment

- ❖ Take two electric cells, an LED of any colour, a cell holder that can fit two cells (Fig. 3.10a), and two lengths of electric wire.
- ❖ Remove about 1 cm of the plastic covering from both ends of each wire to expose the metal.
- ❖ Connect the two wires to the cell holder as shown in Fig. 3.10a.

- ❖ Insert two cells in the holder, taking care that for each cell, its negative terminal is towards the spring side of the holder (Fig. 3.10b) and the battery is ready to use. How will you decide which is the positive terminal of this battery?

The terminal of the holder which is connected to the positive terminal of one cell is positive and the one connected to the negative terminal of the other cell is the negative terminal.

- ❖ Now, connect the free end of the battery positive terminal wire to the longer wire of LED, and the free end of the second wire to the shorter wire of LED (Fig. 3.10c). Does the LED glow?
- ❖ Repeat the above step but interchange the wires connected to the LED (Fig. 3.10d). Does the LED glow again?

You would have observed that the LED glows in the first case (Fig. 3.10c) and does not glow in the other (Fig. 3.10d). It is because the current can pass through the LED in one direction only. The current passes through the LED only when the positive terminal (longer wire) of the LED is connected to the positive terminal of the battery, and negative terminal (shorter wire) of the LED is connected to the negative terminal of the battery. When current passes through the LED, it glows. Always take care to connect an LED correctly in a circuit to make it glow.





Fig. 3.10: Making an LED glow

Sometimes you may come across a device in which the cells are placed side by side. Then, how are the terminals of the cells connected?



If you carefully look inside the battery compartment, you will usually see a thick wire or metal strip connecting the positive terminal of one cell to the negative terminal of the next. To help with proper placement, '+' and '-' symbols are typically printed inside.


DIVE DEEPER




3.2.6 Electric switch

Let us first make a simple switch on our own.

How does a switch turn on or off the torchlight?



(a)



(b)

Fig. 3.11: A switch
(a) in 'OFF' position
(b) in 'ON' position


Activity 3.8: Let us construct

- ❖ Collect two drawing pins, a safety pin (or a paper clip), two wires, and a small piece of cardboard.
- ❖ Insert a drawing pin through the ring of the safety pin and fix it to the cardboard piece, ensuring that the safety pin can rotate freely (Fig. 3.11a).
- ❖ Fix the second drawing pin to the cardboard piece so the free end of the safety pin can touch it (Fig. 3.11b).
- ❖ Connect a wire to each drawing pin—our switch is ready!

Let us now test our switch.

Activity 3.9: Let us test

- ❖ Connect the electric cell, lamp, and switch as shown in Fig. 3.12a. Does the lamp glow?
- ❖ Rotate the free end of the safety pin till it touches the other drawing pin as shown in Fig. 3.12b. Does the lamp glow now?



(a)



(b)

Fig. 3.12: An electrical circuit with a switch in
(a) 'OFF' position
(b) 'ON' position

When the safety pin touches both drawing pins, it closes the gap and completes the path, and allows the current to flow. We call this the **ON** position (Fig. 3.12b) where the **circuit is closed** and current flows from the cell's positive to negative terminal making the lamp glow. When the safety pin does not touch the second drawing pin, the gap in the circuit prevents current flow, and the lamp does not glow. In this **OFF** position (Fig. 3.12a), we say that the **circuit is open**.

Note that a switch can be placed anywhere in a circuit. A **switch** is a simple device that either completes or breaks a circuit. The switches used for lights and other devices at home work the same way, though they are designed differently.









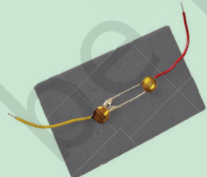





3.3 Circuit Diagrams

The various components of an electrical circuit can be represented by symbols shown in Table 3.2.

Can we represent the circuits in a simpler manner?



Table 3.2: Electrical components and their symbols

S.No.	Electrical component	Symbol
1.	Electric cell 	
2.	Battery 	
3.	Electric lamp 	
4.	Light Emitting Diode (LED) 	
5.	Switch in 'ON' position 	
6.	Switch in 'OFF' position 	
7.	Wire 	

In the symbol for an electric cell, the long line represents the positive terminal, while the short line represents the negative terminal (Fig. 3.13a).

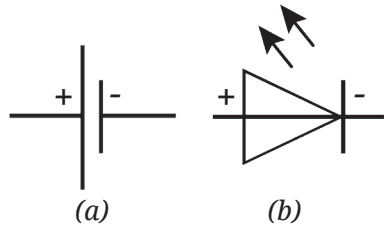


Fig. 3.13: Positive and negative terminals in the symbols of (a) a cell (b) an LED

In the symbol for an LED, the triangle points to the direction in which the current can flow. The two arrows indicate that an LED emits light (Fig. 3.13b).

By using symbols to represent electrical components, it is easier to draw and understand electrical circuits. A representation of an electrical circuit using symbols is called its **circuit diagram**.

Activity 3.10: Let us draw

- ❖ Using symbols shown in Table 3.2, **draw** the circuit diagram of an electrical circuit given in Fig. 3.12a and Fig. 3.10c.

Are your circuit diagrams similar to Fig. 3.14a and Fig. 3.14b respectively?

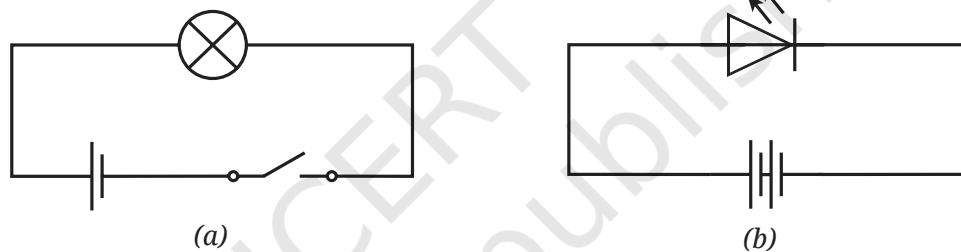


Fig. 3.14: A circuit diagram (a) with an incandescent lamp (b) with an LED lamp

International organisations, such as the International Electrotechnical Commission (IEC), American National Standards Institute (ANSI), and the Institute of Electrical and Electronics Engineers (IEEE) create standard symbols for electrical and electronic parts. Using the same symbols across the world helps people from different countries and industries understand each other easily.

3.4 Electrical Conductors and Insulators


Why did we use metal wires for making electric circuits? Can we not use some other materials for wires?

Also, why are electric wires covered with plastic or rubber?


Suppose, we make wires of materials other than metal and use them for making the electrical circuit. Do you think the electric current will pass through those materials in such a circuit?

Activity 3.11: Let us identify

- ❖ Connect an electric cell and a lamp while leaving the two ends of wires free as shown in Fig. 3.15a.
- ❖ Touch the two free ends of the wires momentarily. Does the lamp glow? If yes, our tester is ready. We can use this tester to **identify** the materials through which electric current passes.
- ❖ Collect objects of different materials, such as metal spoons, coins, cork, rubber, glass, keys, pins, plastic scale, wooden block, aluminium foil, candle, sewing needle, cardboard, paper, and pencil lead.
- ❖ One by one, touch the free ends of the tester's wires to both ends of each object you have collected (Fig. 3.15b). Make sure the wires don't touch each other. Does the lamp glow every time?
- ❖ Record your observations in Table 3.3.



(a)



(b)

Fig. 3.15: (a) Conduction tester
(b) Using the conduction tester for testing a material

Table 3.3: Identifying Conductors and Insulators

S.No.	Object	Material it is made up of	Lamp glows (Yes/No)	Conclusion (Conductor/Insulator)
1.	Stick	Wood	No	
2.	Scale	Plastic		
3.	Bangle	Glass		
4.	Paper strip	Paper		
5.	Candle	Wax		
6.	Key	Metal		
7.	Eraser	Rubber		
8.				
9.				

- ❖ **Analyse** your observations. Did the lamp glow for all materials?

The lamp glows for some materials only. This means that electric current can pass easily through some materials but not through others. The materials through which electric current can flow easily are called **good conductors**, or **conductors of electricity**. The materials through which current cannot pass through are called **insulators**, or **poor conductors of electricity**.

- ❖ Based on the observations you have recorded in Table 3.3, **conclude** which materials are conductors of electricity and which are insulators. Note it in Table 3.3.

From your conclusions in Table 3.3, you would have realised that metals are conductors of electricity, and thus, are used for making wires.



Silver, copper, and gold are the best electrical conductors. However, for making electrical wires, mainly copper is used due to its comparatively lower cost and abundant supply. Different types of electrical wires are used for different uses.

From Table 3.3, you would have also realised that plastic, rubber, and ceramics are electrical insulators. Have you now understood why wires are covered with those materials?

Conductors and insulators are both important. Electrical wires, switches, connectors of plugs, and sockets are made of conductors. Insulators like rubber, plastics, and ceramics are used to cover wires, plug tops, and switches to protect people from electric shocks.



Caution—Our body is a conductor of electricity. Electric current passing through our body may cause severe injury or even death. Always handle electrical appliances with care. Never touch switches or plugs with wet hands, or use electrical devices in wet areas, or handle equipment with damaged insulation or broken plugs.



Have you ever wondered how the electricity from a cell or battery is different from the electricity coming from a wall socket? Electricity from batteries usually powers small devices and is of a type called Direct Current (DC). In contrast, the electricity from power plants that come to the wall socket is known as Alternating Current (AC) and can run larger appliances.

In a Nutshell

- ❖ An electric cell is a portable source of electrical energy.
- ❖ An electric cell has two terminals; one is called positive (+ve) while the other is negative (-ve).
- ❖ In an incandescent electric lamp, there is a thin wire called the filament, which gets hot and glows to produce light when electric current passes through it.
- ❖ An LED has two terminals, one is positive (attached to a longer wire) and the other is negative (the shorter wire).
- ❖ Electric current can pass through LED in one direction only.
- ❖ An LED lights up only when its positive terminal (longer wire) connects to the positive terminal of the battery and its negative terminal (shorter wire) connects to the negative terminal of the battery.
- ❖ A switch is a simple device that either completes or breaks a circuit.
- ❖ The direction of electric current in a closed electrical circuit is taken to be from the positive to the negative terminal of the electric cell.
- ❖ A representation of an electrical circuit using symbols is called its circuit diagram.
- ❖ Materials through which electric current can flow easily are called good conductors or conductors of electricity.
- ❖ Materials through which current cannot pass through are called insulators or poor conductors of electricity.

Let Us Enhance Our Learning

1. Choose the incorrect statement.
 - (i) A switch is the source of electric current in a circuit.
 - (ii) A switch helps to complete or break the circuit.
 - (iii) A switch helps us to use electricity as per our requirement.
 - (iv) When the switch is in 'OFF' position, there is an air gap between its terminals.
2. Observe Fig. 3.16. With which material connected between the ends A and B, the lamp will not glow?


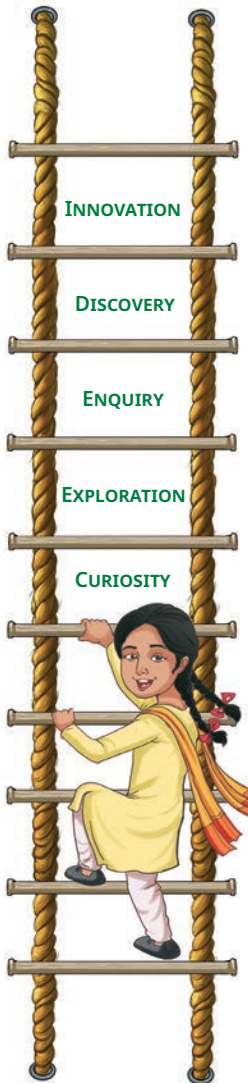


Fig. 3.16





3. In Fig. 3.17, if the filament of one of the lamps is broken, will the other glow? Justify your answer.

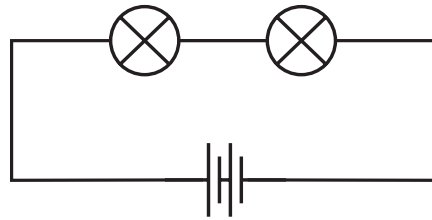


Fig. 3.17

4. A student forgot to remove the insulator covering from the connecting wires while making a circuit. If the lamp and the cell are working properly, will the lamp glow?
5. Draw a circuit diagram for a simple torch using symbols for electric components.

6. In Fig. 3.18:

- (i) If S_2 is in 'ON' position, S_1 is in 'OFF' position, which lamp(s) will glow?
- (ii) If S_2 is in 'OFF' position, S_1 is in 'ON' position, which lamp(s) will glow?
- (iii) If S_1 and S_2 both are in 'ON' position, which lamp(s) will glow?
- (iv) If both S_1 and S_2 are in 'OFF' position, which lamp(s) will glow?

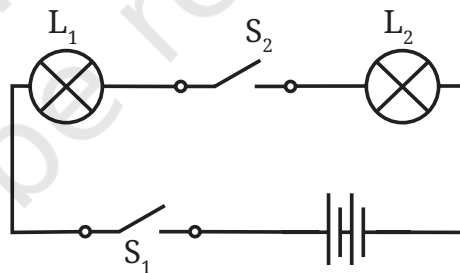


Fig. 3.18

7. Vidyut has made the circuit as shown in Fig. 3.19. Even after closing the circuit, the lamp does not glow. What can be the possible reasons? List as many possible reasons as you can for this faulty operation. What will you do to find out why the lamp did not glow?



Fig. 3.19

8. In Fig. 3.20, in which case(s) the lamp/LED will not glow when the switch is closed?

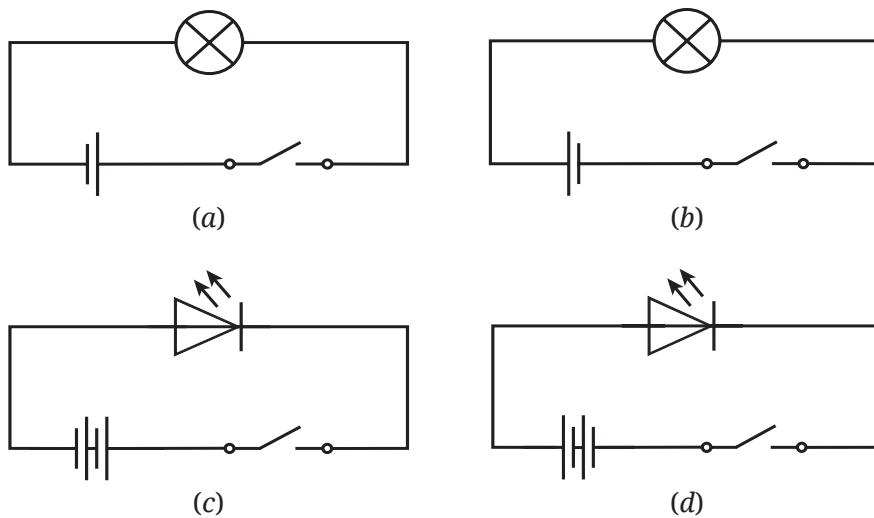


Fig. 3.20

9. Suppose the '+' and '-' symbols cannot be read on a battery. Suggest a method to identify the two terminals of this battery.
10. You are given six cells marked A, B, C, D, E, and F. Some of these are working and some are not. Design an activity to identify which of them are working.
- List the items that you require.
 - Write the procedure that you will follow.
 - With the items, carry out the activity to identify the cells that are working.
11. Using an LED that requires two cells in series to glow, Tanya made the circuit as shown in Fig. 3.21. Will the lamp glow? If not, draw the wires for correct connections.





Fig. 3.21

Exploratory Projects

- ❖ Suppose that due to some problem, the power supply is disrupted in your area for two days. List out which actions from your daily life you would not be able to do.



- ❖ Using a solar panel (Fig. 3.22a) as a source of electrical energy, make a circuit to run a toy fan (Fig. 3.22b) as shown in Fig. 3.22c.




Fig. 3.22

- ❖ Visit an electrical items shop. With the help of the shopkeeper, identify the various types of cells available. For each cell, also find out which device(s) it is used for. Prepare a report.
- ❖ Prepare a list of objects in your home under three categories:
 - Objects which are electrical insulators only
 - Objects which are electrical conductors only
 - Objects which are made of both, whose some parts are insulators and some electrical conductors

SCIENCE AND SOCIETY

Electric cells or batteries are compact portable sources of electrical energy that make the use of some electrical devices more convenient. These cells and batteries come in various shapes and sizes for different purposes, such as cylindrical batteries for torchlights, clocks, remotes, toys; button cells for watches, hearing aids; rechargeable batteries for mobile phones, laptops, and electric vehicles.

